

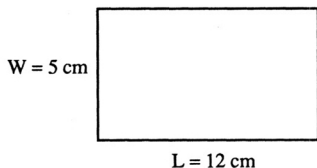
ACTIVITY 21

Name _____

20	36	44	20	44	6
10	28	6	10	108	50
44	6	20	6	10	20
10	20	44	10	44	6
165	62	20	44	8	20
44	6	10	6	144	10

Here is the formula for the area of a rectangle.

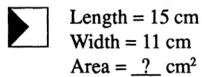
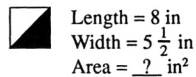
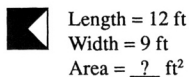
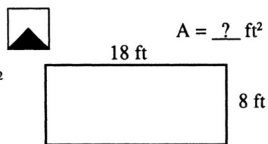
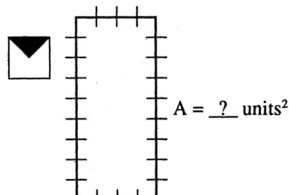
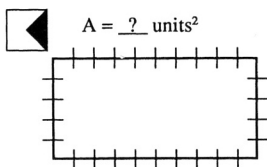
$$A = (\text{Length})(\text{Width})$$



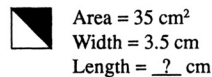
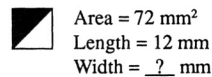
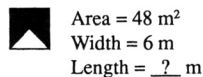
$$A = (12)(5)$$

$$A = 60 \text{ cm}^2$$

Find the area of each rectangle.



Find each missing measurement.



Find the area of each region.

