



Activity 10

Name: \_\_\_\_\_


$-x$	$7x$	$2x$	$3x$	$-x$	$7x$
$0$	$8x$	$11x$	$-6x$	$0$	$8x$
$-2x$	$-4x$	$4x$	$5x$	$-2x$	$-4x$
$-7x$	$6x$	$x$	$-5x$	$-7x$	$6x$
$-x$	$7x$	$2x$	$3x$	$-x$	$7x$
$0$	$8x$	$11x$	$-6x$	$0$	$8x$


Perform the operations.



 $(-3x) + x$



 $(-2x) + (-3x)$



 $5x + x$



 $8x + (-3x)$



 $3x - (-4x)$



 $(-2x) - (-5x) - 2x$



 $(-4x) + (-3x) + x$



 $(-x) - (-3x)$



 $(-3x) + 5x - 2x$



 $(-5x) - 2x$


 $12x - 2x - 2x$


 $6x - x + (-2x)$


 $12x - 2x + x$


 $4x + 7x - 15x$


 $-x + 2x + (-2x)$


 $10x - 6x$