





\$22	\$21	\$6	\$22	\$21	\$22	\$21	\$6	\$22	\$21
\$17	\$20	\$10	\$15	\$19	\$17	\$20	\$10	\$15	\$19
\$4	\$14	\$23	\$5	\$7	\$9	\$11	\$23	\$5	\$7
\$22	\$21	\$12	\$22	\$21	\$22	\$21	\$12	\$22	\$21
\$17	\$20	\$13	\$15	\$19	\$17	\$20	\$13	\$15	\$19
\$22	\$21	\$6	\$22	\$21	\$22	\$21	\$6	\$22	\$21
\$17	\$20	\$10	\$15	\$19	\$17	\$20	\$10	\$15	\$19
\$4	\$14	\$23	\$5	\$7	\$9	\$11	\$23	\$5	\$7
\$22	\$21	\$12	\$22	\$21	\$22	\$21	\$12	\$22	\$21
\$17	\$20	\$13	\$15	\$19	\$17	\$20	\$13	\$15	\$19


Estimate answers by rounding each amount to the nearest dollar.


 \$7.89 → \$8
+ 5.13 → + 5


 \$4.76
+ 3.92


 \$2.56
+ 3.49


 \$4.38
+ 2.85


 \$6.81
+ 4.78


 \$1.69
+ 2.83


 \$6.29
+ 4.77


 \$3.13
4.96
+ 2.06


 \$8.67
5.12
+ 6.89


 \$7.19
6.24
+ 8.86

 \$9.16
8.24
+ 3.17

 \$3.18
5.95
2.14
+ 6.29

 \$9.13
6.78
2.59
+ 3.98

 \$2.68
3.09
5.75
+ 7.35

 \$1.84
3.34
4.69
+ 5.08