

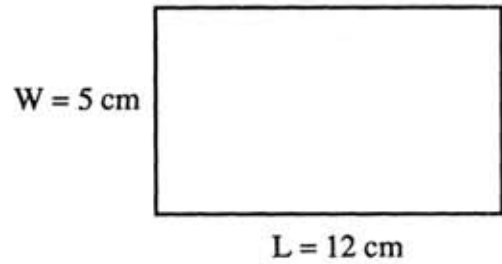
ACTIVITY 21

Name _____

20	36	44	20	44	6
10	28	6	10	108	50
44	6	20	6	10	20
10	20	44	10	44	6
165	62	20	44	8	20
44	6	10	6	144	10

Here is the formula for the area of a rectangle.

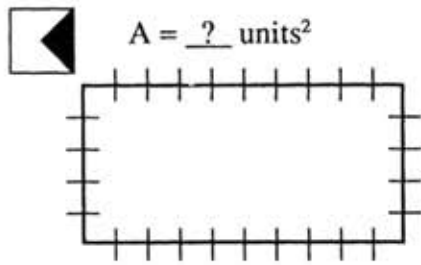
$$A = (\text{Length})(\text{Width})$$



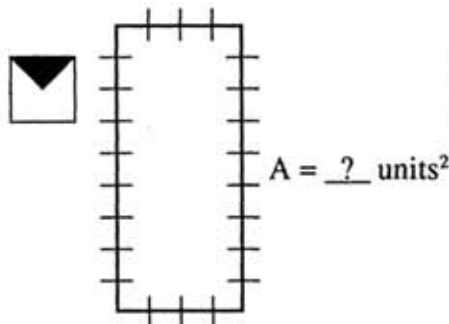
$$A = (12)(5)$$

$$A = 60 \text{ cm}^2$$

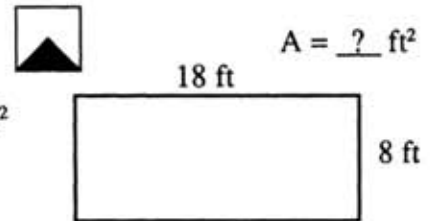
Find the area of each rectangle.



Length = 12 ft
Width = 9 ft
Area = ? ft²



Length = 8 in
Width = $5\frac{1}{2}$ in
Area = ? in²



Length = 15 cm
Width = 11 cm
Area = ? cm²

Find each missing measurement.

Area = 48 m²
Width = 6 m
Length = ? m

Area = 72 mm²
Length = 12 mm
Width = ? mm

Area = 35 cm²
Width = 3.5 cm
Length = ? cm

Find the area of each region.

